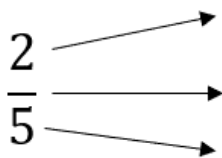
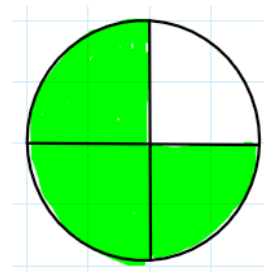
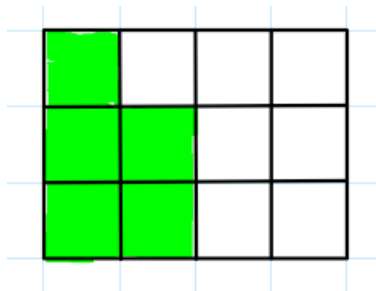


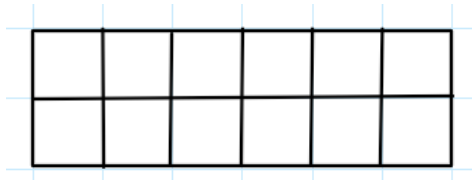
A1. Nevezd meg a tört részeit!



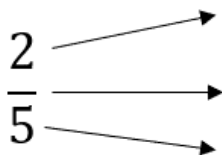
A2. Mekkora rész van beszínezve az ábrákon?



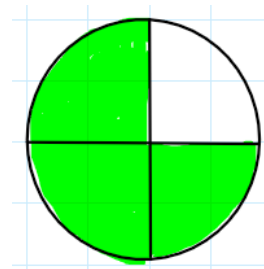
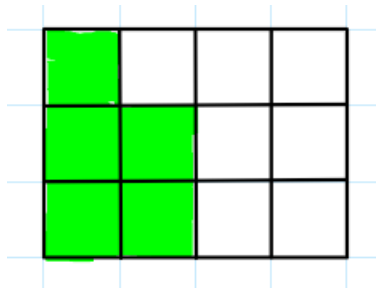
A3. Színezd be a téglalap $\frac{3}{4}$ részét!



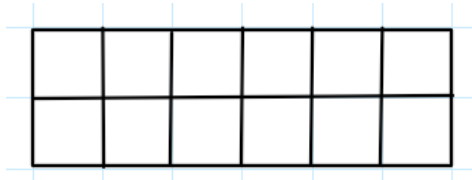
A1. Nevezd meg a tört részeit!



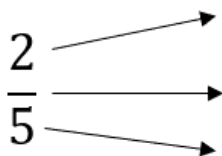
A2. Mekkora rész van beszínezve az ábrákon?



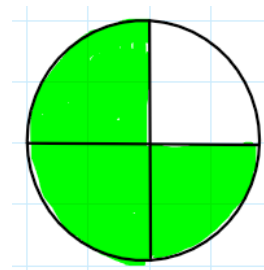
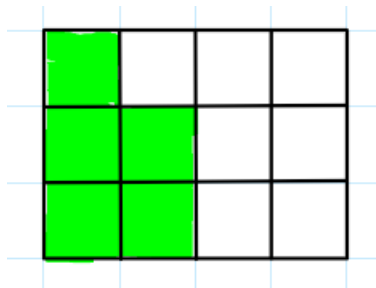
A3. Színezd be a téglalap $\frac{3}{4}$ részét!



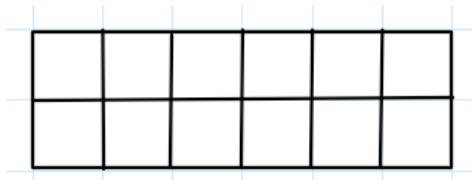
A1. Nevezd meg a tört részeit!



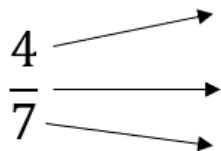
A2. Mekkora rész van beszínezve az ábrákon?



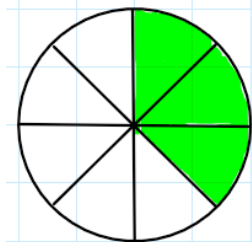

A3. Színezd be a téglalap $\frac{3}{4}$ részét!



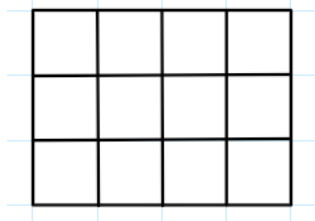
B1. Nevezd meg a tört részeit!



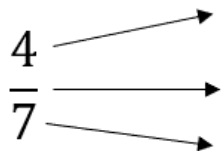
B2. Mekkora rész van beszínezve az ábrákon?



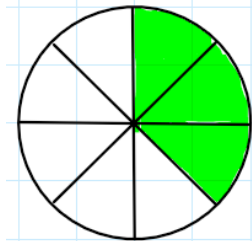

B3. Színezd be a téglalap $\frac{2}{3}$ részét!



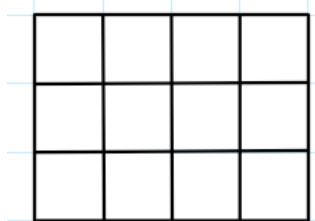
B1. Nevezd meg a tört részeit!



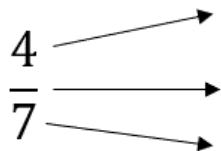
B2. Mekkora rész van beszínezve az ábrákon?



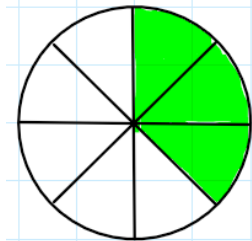

B3. Színezd be a téglalap $\frac{2}{3}$ részét!



B1. Nevezd meg a tört részeit!



B2. Mekkora rész van beszínezve az ábrákon?



B3. Színezd be a téglalap $\frac{2}{3}$ részét!

